


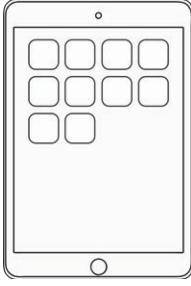



Cube Length



Estimate, then measure the objects below using cubes.

Object	Estimate	Measurement
<p>Rubber</p> 	<p>I estimate my rubber to be about _____ cubes long.</p>	<p>My rubber is _____ cubes long.</p>
<p>Desk</p> 	<p>I estimate my desk to be about _____ cubes long.</p>	<p>My desk is _____ cubes long.</p>
<p>Tablet</p> 	<p>I estimate the tablet to be about _____ cubes long.</p>	<p>The tablet is _____ cubes long.</p>
<p>Book</p> 	<p>I estimate my book to be about _____ cubes long.</p>	<p>My book _____ is _____ cubes long.</p>
<p>Free choice</p>	<p>I estimate _____ to be about _____ cubes long.</p>	<p>_____ is _____ cubes long.</p>